



Count the amount of each of the different objects.

1)



2)




3)



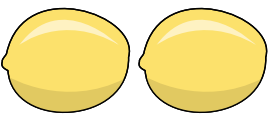
4)



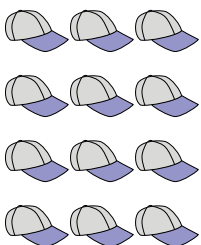
5)



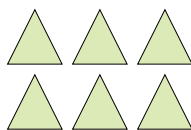
6)




7)



8)



9)



Answers

1. _____

2. _____

3. _____

4. _____

5. _____

6. _____

7. _____

8. _____

9. _____



Count the amount of each of the different objects.

1)



2)



3)



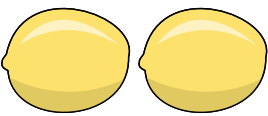
4)



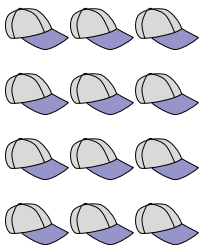
5)



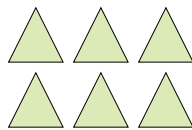
6)




7)



8)



9)



Answers

1. 10

2. 11

3. 10

4. 3

5. 15

6. 2

7. 12

8. 6

9. 8